

Government General Degree College, Dantan-II

3rd Semester B. Sc (H) Internal Examination-2021

Subject: Chemistry

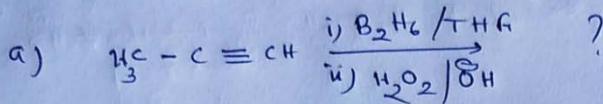
Paper: CC-7T

F.M: 20

Time: 1h

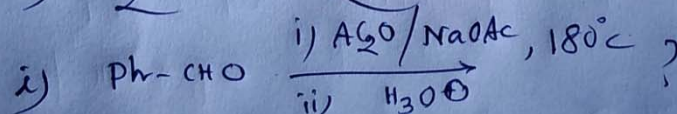
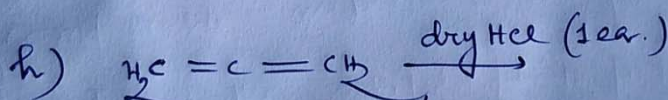
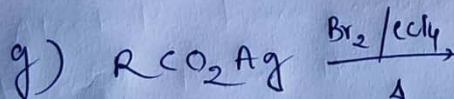
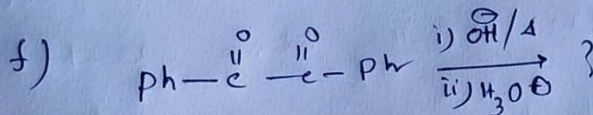
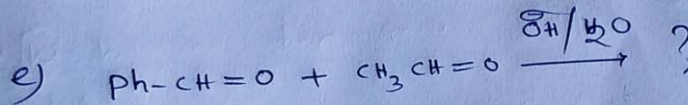
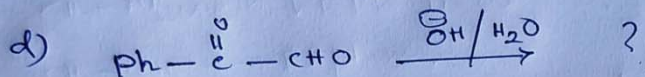
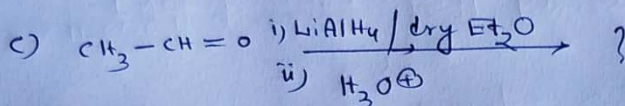
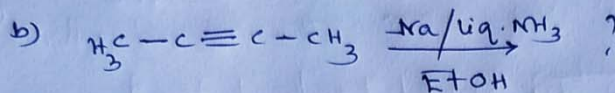
Answer the following questions as per direction:

1. Write down the products of the following reactions and give the mechanism in each case. (attempt only 8 questions)




~~2*8~~

8*2=16



2. Identify the product

[2]



3.

carry out the following transformation

[2]

