



বিদ্যাসাগর বিশ্ববিদ্যালয়  
VIDYASAGAR UNIVERSITY

Question Paper

**B.Sc. Honours Examinations 2020**

(Under CBCS Pattern)

Semester - V

**Subject: CHEMISTRY**

**Paper: C12T & C12P**

(ORGANIC CHEMISTRY - V)

**Full Marks : 60**

**Time : 3 Hours**

*Candidates are required to give their answer in their own words as far as practicable.*

*The figures in the margin indicate full marks.*

**Group - A**

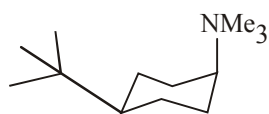
**THEORY (Marks : 40)**

Answer any *two* from the following questions :

2×20

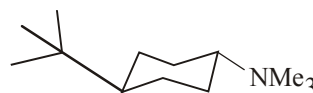
1. (a) Which isomer A or B will converted to a quaternary salt more rapidly ?

2



A

or



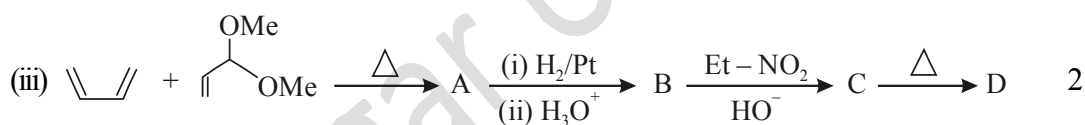
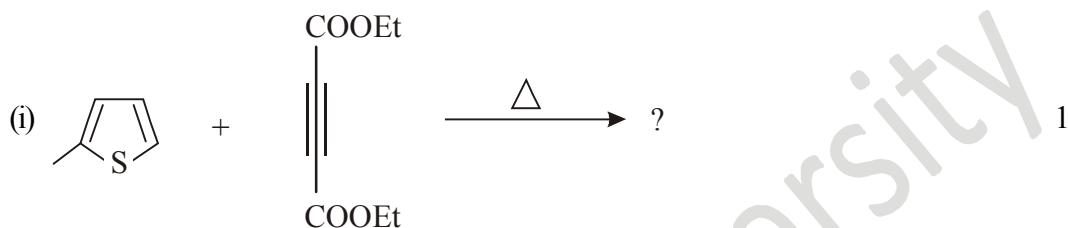
B

(b) Discuss the relative stability of cyclopropane and cyclohexane in the light of Baeyer Strain Theory. 2

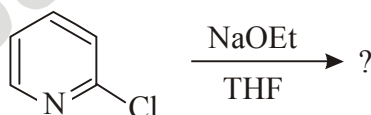
(c) What are chemical compositions of DNA ? 2

(d) Why D-Glucose is called dextrose but D-Fructose is levulose ? 2

(e) Predict the product of the following reactions



(f) Predict the product with possible mechanism : 2

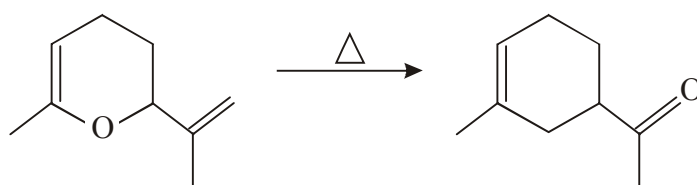


(g) Why amino acids have higher dipole moment and melting point ? 2

(h) Why does  $\beta$ -methyl glycoside hydrolyse faster than the  $\alpha$ -isomer. 2

(i) Give an example of reducing and non-reducing sugar. 2

2. (a) Suggest a mechanism for the following transformation : 4



(b) Why N-acetyl pyrrole can not be prepared by reacting with acetic anhydride and pyrrole ? How this problem could be solved ? 4

(c) Write down a scheme for the synthesis of Gly-Ala using DCC promoted peptide bond formation. Give mechanism for the DCC coupling reaction. 5

(d) How would you convert the following :

(i) Glucose  $\rightarrow$  Fructose 2

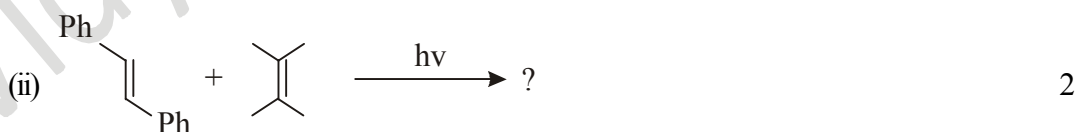
(ii) 2-Chloroaniline  $\rightarrow$  Chloroquinine 2

(iii) Phthalimide  $\rightarrow$  L-Phenyl alanine 3

3. (a) Partial hydrolysis of peptide with acids is generally unsatisfactory but enzymatic hydrolysis is extremely useful-explain. 4

(b) Treatment with sodium borohydride converts aldose A into an optically inactive alditol. Ruff degradation of A forms B, whose alditol is optically inactive. Ruff degradation of B forms D-glyceraldehyde. Identify A and B with explanation. 4

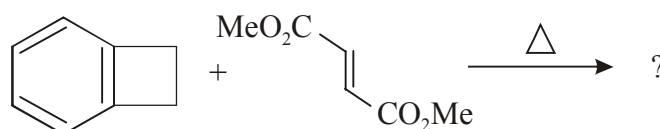
(c) Identify the Product(s) of the following reaction showing frontier orbital interaction.



(d) Write the name and structure, in Fischer projection formula, of the enantiomer of  $\alpha$ -D-(+) glucose correlate with Howerth projection formula-Explain. 3

(e) What do you mean by "Reverse electron demand" in Diels-Alder reaction ? 3

4. (a) How does epimer differ with anomer ? Explain with an example. 2
- (b) Show how Skaraup synthesis can be used to prepare 4-methylquinoline. 4
- (c) Out line chemical method for determination of C-terminal and N-terminal amino acids. 4
- (d) Predict the formation of the product with stereochemistry for the following reaction. 3



- (e) Sucrose cannot reduce Tollen's reagent but maltose can-explain. 2
- (f) Mention the name of different type of RNA's and discuss their functions. 5

### Group - B

#### PRACTICAL (Marks : 20)

Answer any **one** from the following questions : 1×20

- Describe the procedure to separate the dyes from a mixture of dyes by TLC method.
- Describe the method to separate two amino acids from a mixture.
- State the principle and method for the separation on of a mixture of dyes using Column chromatography.

\_\_\_\_\_